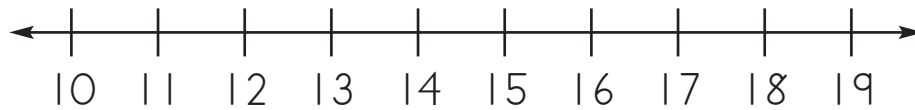


Lesson 8

1 Write the number **before**.



_____ 12

_____ 15

_____ 14

_____ 18

_____ 19

_____ 11

_____ 16

_____ 13

_____ 17

2 Circle the **greater** number in each pair.

12 6

4 7

18 11

5 8

13 19

15 2



3 Circle the **smaller** number of each pair.

13	7
----	---

5	8
---	---

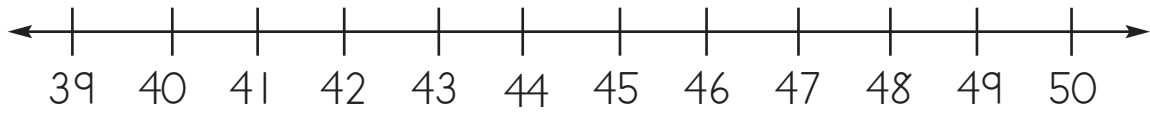
19	12
----	----

6	9
---	---

12	18
----	----

16	3
----	---

4 Add.



44
+ 1
—

48
+ 1
—

41
+ 3
—

43
+ 2
—

49
+ 1
—

39
+ 1
—

42
+ 4
—

45
+ 3
—

46
+ 1
—

48
+ 2
—

40
+ 3
—

47
+ 2
—

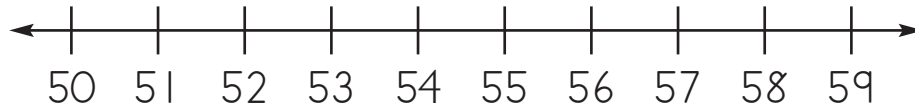
44
+ 2
—

41
+ 4
—

50
+ 0
—

Lesson 82

1 Write the number **after**.



56 _____

51 _____

54 _____

58 _____

55 _____

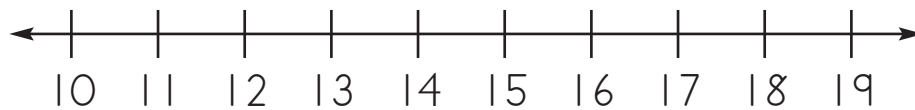
50 _____

52 _____

57 _____

53 _____

2 Write the number **before**.



_____ 19

_____ 14

_____ 12

_____ 17

_____ 16

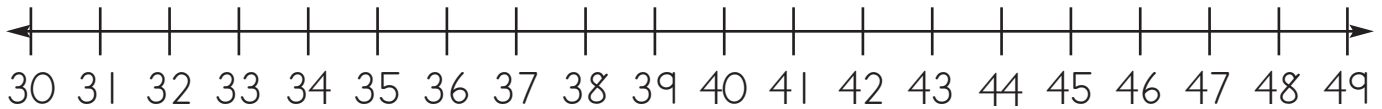
_____ 18

_____ 11

_____ 15

_____ 13

3 Add.



$$\begin{array}{r} 32 \\ + 1 \\ \hline \end{array}$$

$$\begin{array}{r} 44 \\ + 4 \\ \hline \end{array}$$

$$\begin{array}{r} 41 \\ + 3 \\ \hline \end{array}$$

$$\begin{array}{r} 35 \\ + 4 \\ \hline \end{array}$$

$$\begin{array}{r} 39 \\ + 1 \\ \hline \end{array}$$

$$\begin{array}{r} 46 \\ + 3 \\ \hline \end{array}$$

$$\begin{array}{r} 42 \\ + 1 \\ \hline \end{array}$$

$$\begin{array}{r} 33 \\ + 2 \\ \hline \end{array}$$

$$\begin{array}{r} 30 \\ + 2 \\ \hline \end{array}$$

$$\begin{array}{r} 40 \\ + 0 \\ \hline \end{array}$$

$$\begin{array}{r} 43 \\ + 2 \\ \hline \end{array}$$

$$\begin{array}{r} 37 \\ + 1 \\ \hline \end{array}$$

4 Circle the **smaller** number in each pair.

11	8
----	---

13	15
----	----

1	4
---	---

7	6
---	---

16	17
----	----

9	5
---	---

Lesson 83

1

JANUARY						
Sun	Mon	Tues	Wed	Thurs	Fri	Sat
			1	2	3	4
5	6	7	8	9	10	11
12	13	14	15	16	17	18
19	20	21	22	23	24	25
26	27	28	29	30	31	

FEBRUARY						
Sun	Mon	Tues	Wed	Thurs	Fri	Sat
						1
2	3	4	5	6	7	8
9	10	11	12	13	14	15
16	17	18	19	20	21	22
23	24	25	26	27	28	

MARCH						
Sun	Mon	Tues	Wed	Thurs	Fri	Sat
						1
2	3	4	5	6	7	8
9	10	11	12	13	14	15
16	17	18	19	20	21	22
23	24	25	26	27	28	29
30	31					

APRIL						
Sun	Mon	Tues	Wed	Thurs	Fri	Sat
		1	2	3	4	5
6	7	8	9	10	11	12
13	14	15	16	17	18	19
20	21	22	23	24	25	26
27	28	29	30			

MAY						
Sun	Mon	Tues	Wed	Thurs	Fri	Sat
				1	2	3
4	5	6	7	8	9	10
11	12	13	14	15	16	17
18	19	20	21	22	23	24
25	26	27	28	29	30	31

JUNE						
Sun	Mon	Tues	Wed	Thurs	Fri	Sat
1	2	3	4	5	6	7
8	9	10	11	12	13	14
15	16	17	18	19	20	21
22	23	24	25	26	27	28
29	30					

JULY						
Sun	Mon	Tues	Wed	Thurs	Fri	Sat
		1	2	3	4	5
6	7	8	9	10	11	12
13	14	15	16	17	18	19
20	21	22	23	24	25	26
27	28	29	30	31		

AUGUST						
Sun	Mon	Tues	Wed	Thurs	Fri	Sat
					1	2
3	4	5	6	7	8	9
10	11	12	13	14	15	16
17	18	19	20	21	22	23
24	25	26	27	28	29	30

SEPTEMBER						
Sun	Mon	Tues	Wed	Thurs	Fri	Sat
	1	2	3	4	5	6
7	8	9	10	11	12	13
14	15	16	17	18	19	20
21	22	23	24	25	26	27
28	29	30				

OCTOBER						
Sun	Mon	Tues	Wed	Thurs	Fri	Sat
			1	2	3	4
5	6	7	8	9	10	11
12	13	14	15	16	17	18
19	20	21	22	23	24	25
26	27	28	29	30	31	

NOVEMBER						
Sun	Mon	Tues	Wed	Thurs	Fri	Sat
						1
2	3	4	5	6	7	8
9	10	11	12	13	14	15
16	17	18	19	20	21	22
23	24	25	26	27	28	29
30						

DECEMBER						
Sun	Mon	Tues	Wed	Thurs	Fri	Sat
	1	2	3	4	5	6
7	8	9	10	11	12	13
14	15	16	17	18	19	20
21	22	23	24	25	26	27
28	29	30	31			

How many days are in a week? _____

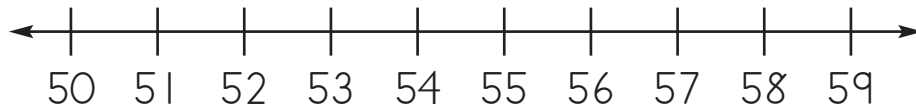
How many months are in a year? _____

How many months have 30 days? _____

How many months have 31 days? _____



2 Write the number **after**.



52 _____

55 _____

51 _____

57 _____

54 _____

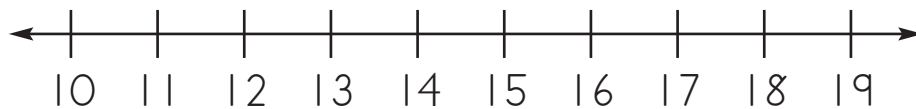
50 _____

58 _____

53 _____

56 _____

3 Write the number **before**.



_____ 15

_____ 11

_____ 16

_____ 12

_____ 17

_____ 13

_____ 18

_____ 14

_____ 19